



Addition Word Problems


Read each problem. Find the sum.

-  There are 3 purple balloons. There are 7 yellow balloons.
How many balloons are there in all?

$$\boxed{} + \boxed{} = \boxed{}$$

-  There are 10 toy robots and 2 toy cars on the shelf.
How many toys are there altogether?

$$\boxed{} + \boxed{} = \boxed{}$$

-  There are 4 red books and 12 blue books on the table.
How many books are on the table in all?

$$\boxed{} + \boxed{} = \boxed{}$$

More Than, Less Than or Equal To

18	$\begin{matrix} > \\ < \\ = \end{matrix}$	15	10	$\begin{matrix} > \\ < \\ = \end{matrix}$	20
12	$\begin{matrix} > \\ < \\ = \end{matrix}$	12	19	$\begin{matrix} > \\ < \\ = \end{matrix}$	9
6	$\begin{matrix} > \\ < \\ = \end{matrix}$	16	13	$\begin{matrix} > \\ < \\ = \end{matrix}$	14