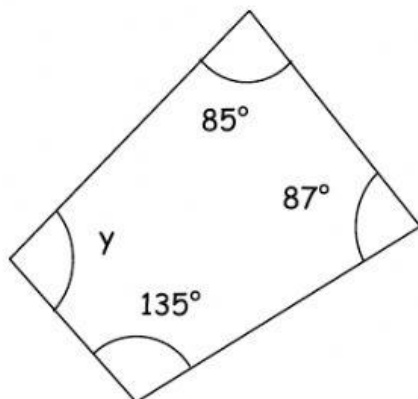


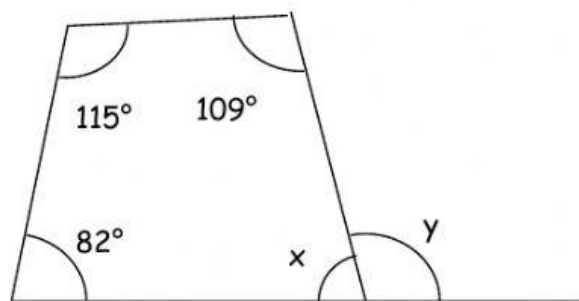
# Exercise

Name: \_\_\_\_\_

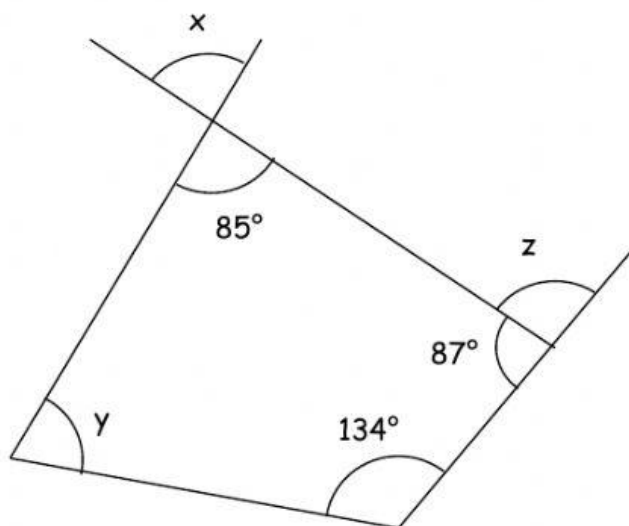
Find the unknown angles.



$y = \underline{\hspace{2cm}}^\circ$



$x = \underline{\hspace{2cm}}^\circ$ ,  $y = \underline{\hspace{2cm}}^\circ$



$x = \underline{\hspace{2cm}}^\circ$ ,  $y = \underline{\hspace{2cm}}^\circ$ ,  $z = \underline{\hspace{2cm}}^\circ$