







Application



Temperature- Is it hot or cold ?

Chose the correct answer. (1pt.each)

 hot cold	 hot cold	 hot cold
 hot cold	 hot cold	 hot cold

Look at the picture, is it hot or cold?



What item will warm you up when it is cold?




Concepts


 Write **L** for light items and **H** for heavy items




Which object is heavier?



Which object is lighter?



Computation

 Count the ten frame. Write the teen number on the line. (1pt. each)

$$\begin{array}{|c|c|c|c|c|} \hline \bullet & \bullet & \bullet & \bullet & \bullet \\ \hline \bullet & \bullet & \bullet & \bullet & \bullet \\ \hline \end{array} + \begin{array}{|c|c|c|c|c|} \hline \bullet & \bullet & \bullet & & \\ \hline & & & & \\ \hline \end{array} = \underline{\hspace{2cm}}$$

$$\begin{array}{|c|c|c|c|c|} \hline \bullet & \bullet & \bullet & \bullet & \bullet \\ \hline \bullet & \bullet & \bullet & \bullet & \bullet \\ \hline \end{array} + \begin{array}{|c|c|c|c|c|} \hline \bullet & \bullet & \bullet & \bullet & \bullet \\ \hline & & & & \\ \hline \end{array} = \underline{\hspace{2cm}}$$

●	●	●	●	●
●	●	●	●	●

+

●	●	●	●	●
●	●	●	●	

=

●	●	●	●	●
●	●	●	●	●

+

●	●	●	●	●
●				

=

●	●	●	●	●
●	●	●	●	●

+

●	●			

=