

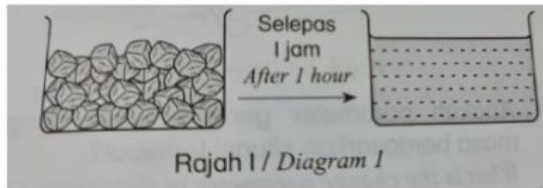
Science Year 4

Name : _____

Class: 4 _____

Answer all the questions.

1. Diagram 1 shows an investigation carried out by a pupil.



What is the sense involved in the investigation?

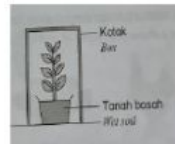
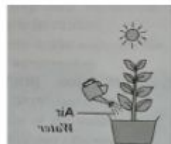
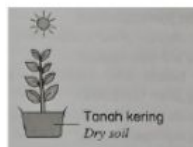
Sense of smell

Sense of touch

Sense of sight

Sense of hearing

2. Which of the following plant still survive and grow healthily after two weeks?



3. Diagram II shows two activities in human breathing.



What are the organs involved in the process above?

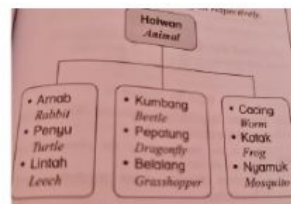
Nose trachea and lungs

Nose chest and heart

Eyes, nose and lungs

Chest, lungs and liver

4. Diagram 2 shows a classification of animals based on their breathing organs respectively.



Which of the following animals is **not** in the correct group?

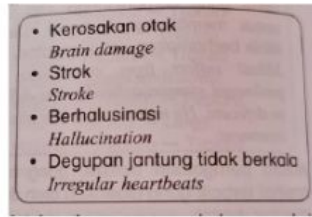
Leech and mosquito

Rabbit and beetle

Turtle and grasshopper

Earth worm and dragonfly

5. The following information shows the effects of human bad habits.



Which of the following bad habits leads to the effect above?

Smoking Drug abuse Drinking alcoholic drinks Eating an unbalanced diet

6. Which of the following is **not** a disease contracted by a heavy smoker?

Stroke Heart disease Diabetes mellitus Lung cancer

7. Which of the following parts of a plant responds to gravity?

Roots Leaves Shoot Flower

8. The diagram shows a measuring tool.



Which of the following objects can be measured by using the above measuring tool?

Ball Hula hoop Plastic bottle Futsal court

9. The diagram shows parts of grasshopper.



At which part is breathing organ located?

P Q R S

10. State the basic needs of plants.
