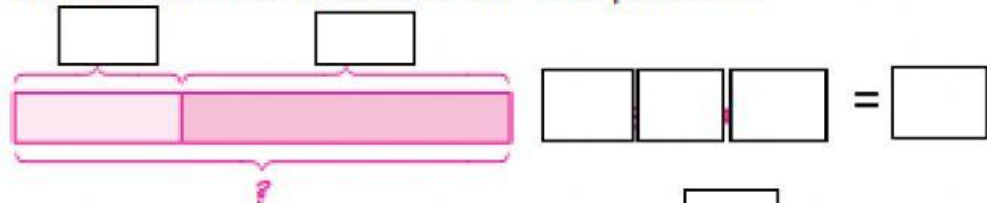


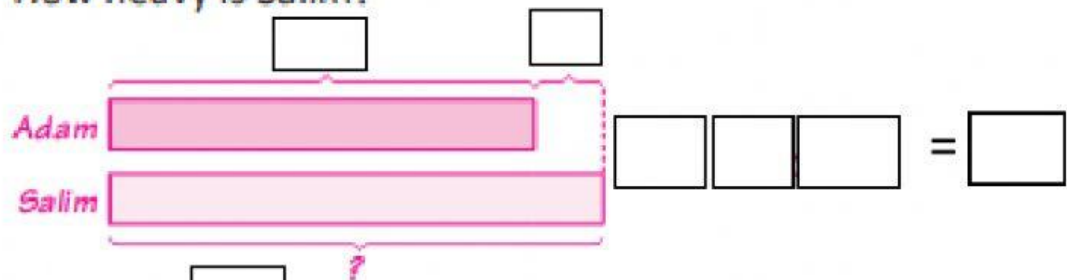
## Practice 8 Addition and Subtraction of Masses

1. Two pandas have masses of 35 kg and 67 kg.  
What is the total mass of the two pandas?



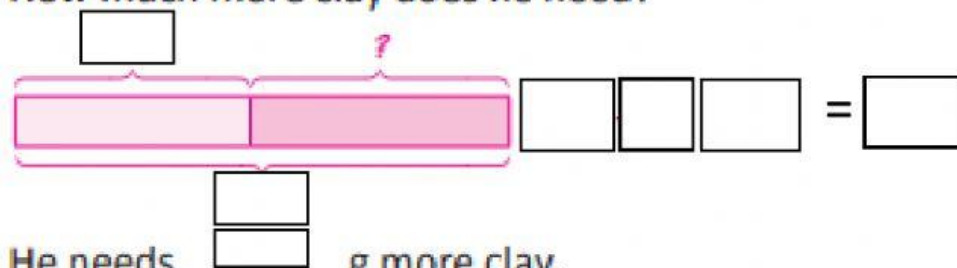
The total mass of the two pandas is      kg.

2. Adam is 32 kg.  
He is 5 kg lighter than Salim.  
How heavy is Salim?



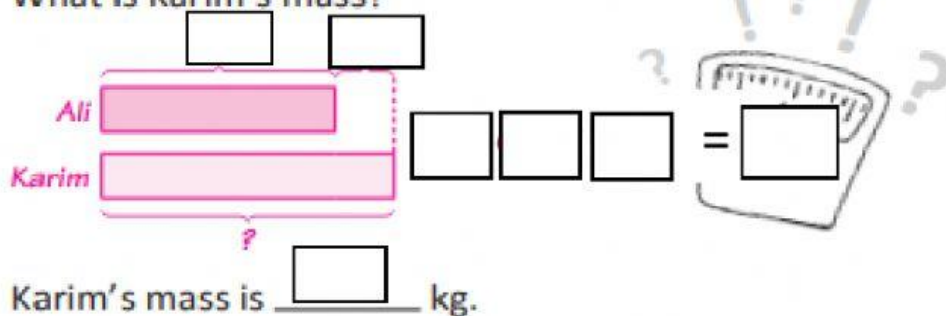
Salim is      kg.

3. Desmond needs 300 g of clay to make a small statue.  
He has only 143 g of clay.  
How much more clay does he need?

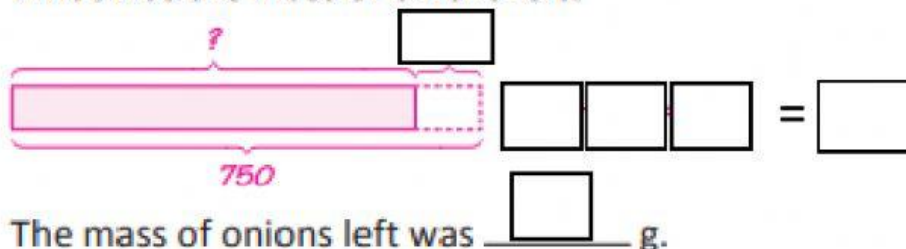


He needs      g more clay.

4. Ali has a mass of 25 kg.  
Karim is 6 kg heavier than Ali.  
What is Karim's mass?



5. Manan bought a bag of onions of mass 750 g.  
He threw away 100 g of onions which were spoilt.  
What was the mass of onions left?



6. Haikal sold 45 kg of rice on Monday.  
He sold 18 kg less rice on Tuesday than on Monday.  
How much rice did he sell on Tuesday?

