



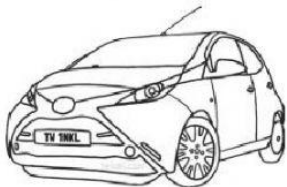
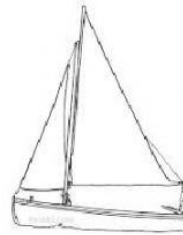
How Tourist Travel

Select the correct answer.

1. Tourist come to Barbados for:



2. Select the ways in which tourist travel to Barbados.



3. In your books complete the following chart by drawing correct mode of transport in each column.

Short Stay Tourist - hours Travel by:	Long Stay Tourist - days/weeks/months Travel by: