


Practice 2 Finding the Masses of Things

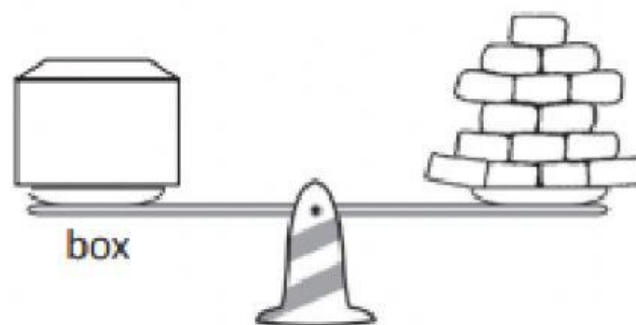
Fill in the blanks with the correct numbers.

1.




The mass of the ball is _____ marbles.

2.




The mass of the box is _____ bricks.

3.



The mass of Hippo is _____ bricks.


4.



The mass of Kitty is more than 14 bricks.

The mass of Kitty is _____ bricks.

5. Look at the pictures.
Then, fill in the blanks.



- (a) The mass of the lemon is _____ beads.
(b) The mass of the tomato is _____ beads.
(c) The mass of the cucumber is _____ beads.
(d) The lemon is heavier than the _____.
(e) The lemon is lighter than the _____.
(f) The _____ is the heaviest.
(g) The _____ is the lightest.
(h) Arrange the fruits in order according to their masses.

_____ _____ _____
heaviest