


DATE:

NAME:

I. Find the unknown:


A. $4 \times 5 =$ _____



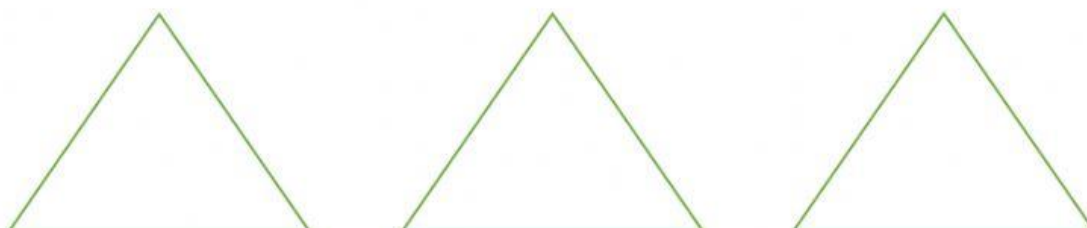
B. $3 \times 4 =$ _____



C. $16 \div 2 =$ _____



D. $15 \div 3 =$ _____



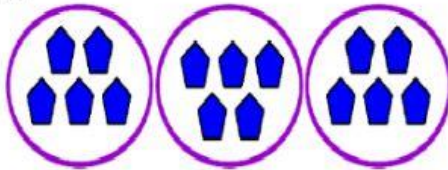
II. Find the unknown for given representation:

a.



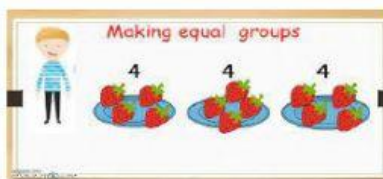
Multiplication equation: _____ \times _____ = _____

b.



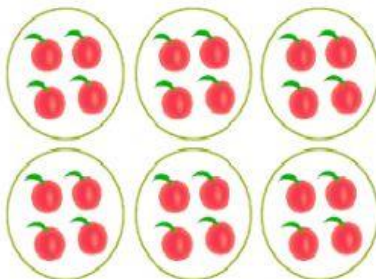
Multiplication equation: _____ \times _____ = _____

c.



Division equation: _____ \div _____ = _____

d.



Division equation: _____ \div _____ = _____