
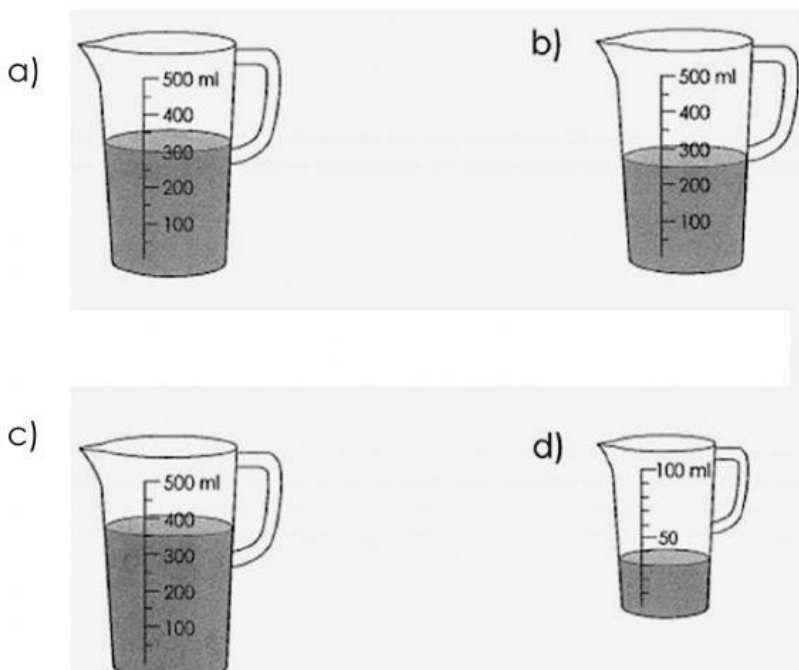
	<b>COLEGIO ANGLO AMERICANO</b> <i>"Proyecto forjador de valores para una Nueva Sociedad"</i>		
	<b>DEPARTAMENTO DE CIENCIAS NATURALES Y EDUCACIÓN AMBIENTAL-</b> PHYSICS AND CHEMISTRY.		
	<b>Worksheet: Volume.</b>		
Time: 20 minutes.		Grade.	Date.
Name:		3°	_____, 2021

FINAL	Achievement indicator	
III	The student recognizes and understands units to measure volume.	

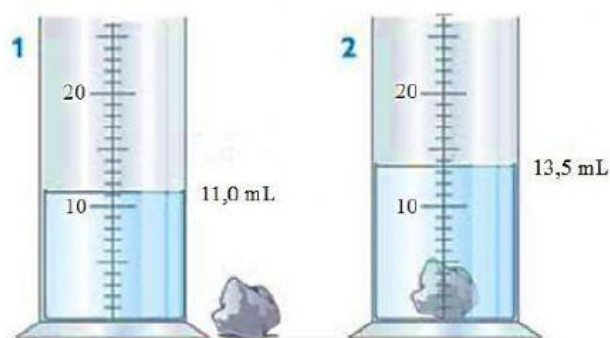
1. Carla finds the following objects, and she needs to know what of those have more volume. Mark with an X the correct answer. Then, write in the space if it is a regular or irregular object



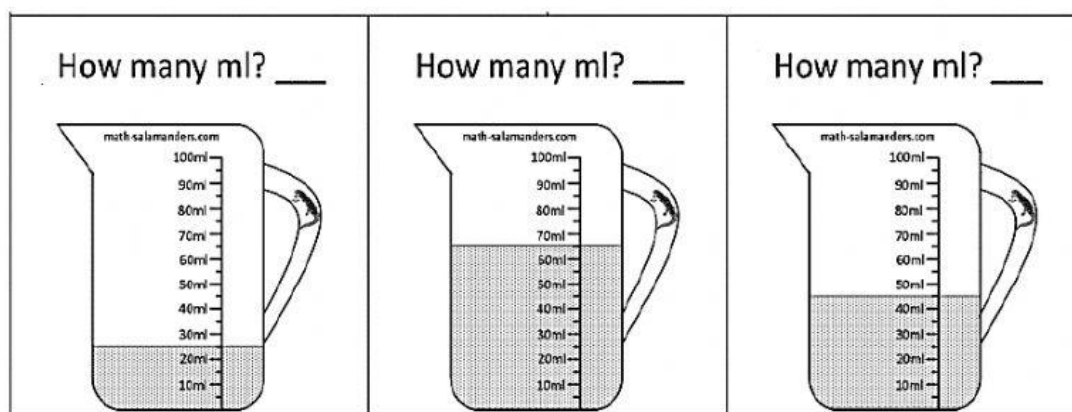
2. Some third grades students were preparing a juice, so they add 130 ml of lemon, 170 ml of water, and 50 ml of honey. Now help them to identify which of the following jar belong to the total volume of the juice.



3. In the science laboratory the students were studying about the volume of a rock. So, they used graduated cylinder and fill with water as the picture shows. Help them to know the volume of the stone. Write your answer in the space.




4. Look at the pictures and answer.



Teacher's name:	Revised by:	Approved by:
María Camila Quevedo Teacher	Mireya Malpica M Head of Department	Mireya Malpica M Head of Department