

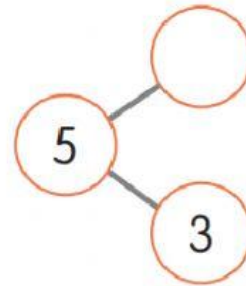
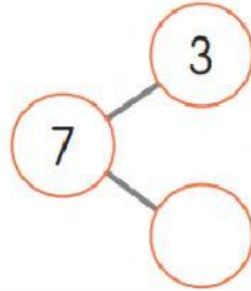
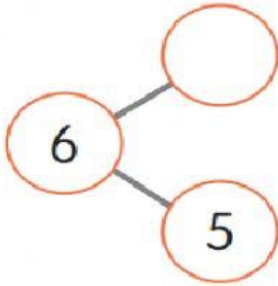


## SUBTRACTION

### Mathematics - Grade 1

#### Choose the correct answer


Number pairs



Taking away



There are \_\_\_\_\_ eggs left.

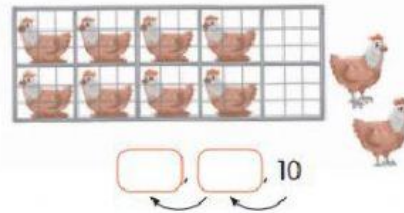


There are \_\_\_\_\_ fish left.

Count back



There are \_\_\_\_\_ ducks left in the pond.



There are \_\_\_\_\_ chickens left in the cage.


Find the difference

What is the difference between 9 and 5?



The difference is .

Find the difference between 5 and 2.



The difference is \_\_\_\_\_.



Trust  
&  
Pride



## DOUBLES and NEAR DOUBLES

### Mathematics - Grade 1

**Choose the correct answers**



$3 + 3 = \underline{\quad}$

Double 3 is         .




$5 + 5 = \underline{\quad}$

Double 5 is         .


Complete the doubles.




Double 1 is         



Double 3 is         



Double 4 is         



Double 5 is         

Complete the doubles and near doubles.

(a)  $2 + 2 = \square$  so,  $2 + 3 = \square$

(b)  $4 + 4 = \square$  so,  $4 + 3 = \square$

(c)  $5 + 5 = \square$  so,  $5 + 4 = \square$

(d)  $7 + 7 = \square$  so,  $7 + 8 = \square$



Trust  
&  
Pride