

# 3 D SHAPES

cone

cube

cuboid


cylinder

pyramid

The **flat shapes** in each set are the **faces of solids**.

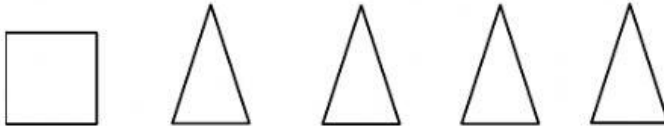
Write the name of each solid.

1.



These flat shapes make a

2.




These flat shapes make a

3.



These flat shapes make a

4.



These flat shapes make a