

# Review: Addition within 10

Choose the correct word in the box to fill in the blanks.

1. \_\_\_\_\_

$$7 + 0 = 7$$

2. \_\_\_\_\_ 3. \_\_\_\_\_

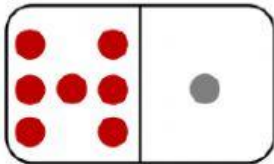
## Word list

- plus sign
- equal sign
- sum



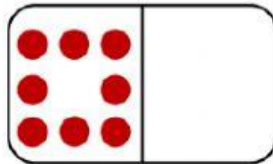
Write the **additions**.

4.



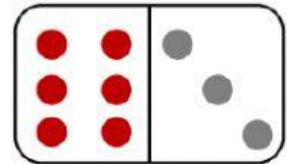
$$\underline{\quad} \bigcirc \underline{\quad} = \underline{\quad}$$

5.



$$\underline{\quad} \bigcirc \underline{\quad} = \underline{\quad}$$

6.




$$\underline{\quad} \bigcirc \underline{\quad} = \underline{\quad}$$

9.




Tell a story then write.

There are      ice cream cones .

There are      **more** ice cream cones .

How many ice cream cones  are there **in all**?

$$\underline{\quad} \bigcirc \underline{\quad} = \underline{\quad}$$

There are      ice cream cones  **in all**.

