

DATE:

NAME:

I. Write the multiplication & division equation for given equal groups:

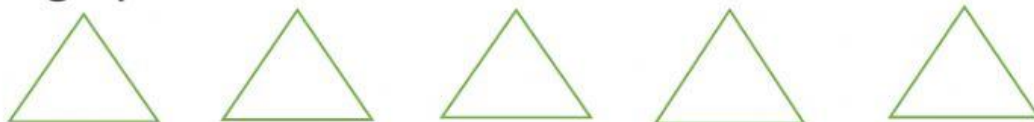
1. A. 4 groups of 5 = 20

B. 20 divided by 4 = 5




II. Draw an array for the given equation:

1. 5 groups of 3 = 15




2. 8 divided by 4 = 2



III. Write the multiplication & division equation for the given array

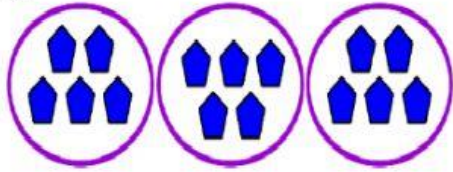
a.



Multiplication equation: _____

Division equation: _____

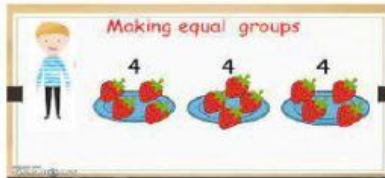
b.



Multiplication equation: _____ \times _____ = _____

Division equation: _____ \div _____ = _____

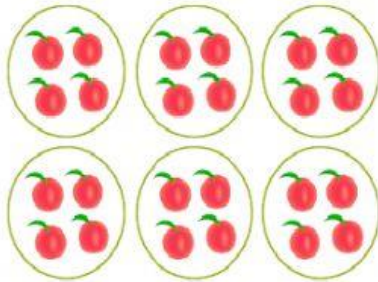
c.



Multiplication equation: _____ \times _____ = _____

Division equation: _____ \div _____ = _____

d.



Multiplication equation: _____ \times _____ = _____

Division equation: _____ \div _____ = _____