



Name: _____ Date: _____

Application


Even and Odd Numbers

 Listen to the word problem. Then, solve it.

 1. There are 5 bikes. Is five an even number or an odd number?


Even

Odd

 2. He has 11 toys. Is 11 an even number or an odd number?


Even

Odd

 3. Jake has 16 friends. Is 16 an even number or an odd number?

Even

Odd

 4. The girl has 4 ties and 3 pies. How many things does she have? Is that an even number or an odd number?

Number: _____

Even

Odd