

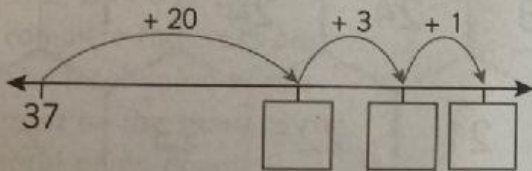
# Addition and Subtraction on the number line

## Math 4

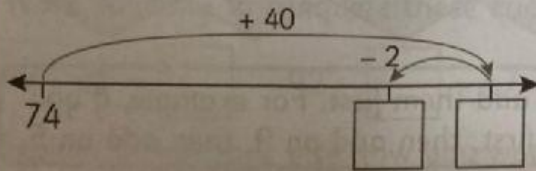
### 1 Calculating on the number line

Complete these calculations.

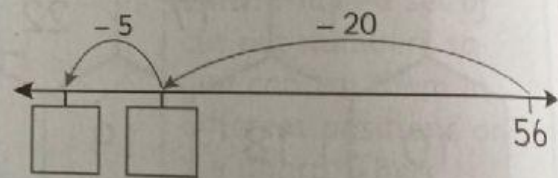
$$37 + 24 = \square$$



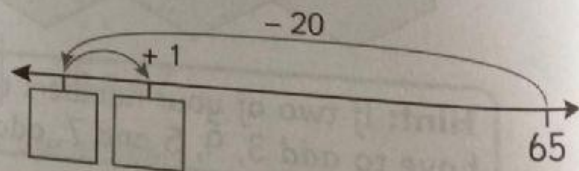
$$74 + 38 = \square$$



$$56 - 25 = \square$$



$$65 - 19 = \square$$



You will need: resource 1, page 76 for activity 3