

NAMA: _____

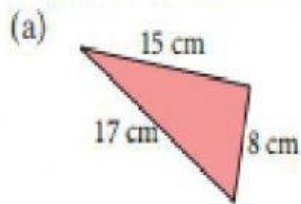
TINGKATAN 1: _____



SEKOLAH MENENGAH KEBANGSAAN DATO' BIJAYA SETIA
08000 SUNGAI PETANI KEDAH

Self Practice 13.2a

1. Determine whether each of the following triangles is a right-angled triangle.



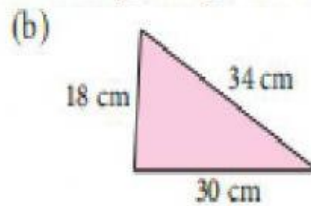
The longest side = cm

Thus, $^2 =$

$^2 + ^2 = +$

$=$

Hence,



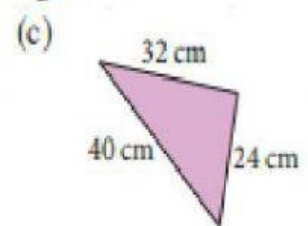
The longest side = cm

Thus, $^2 =$

$^2 + ^2 = +$

$=$

Hence,



The longest side = cm

Thus, $^2 =$

$^2 + ^2 = +$

$=$

Hence,