

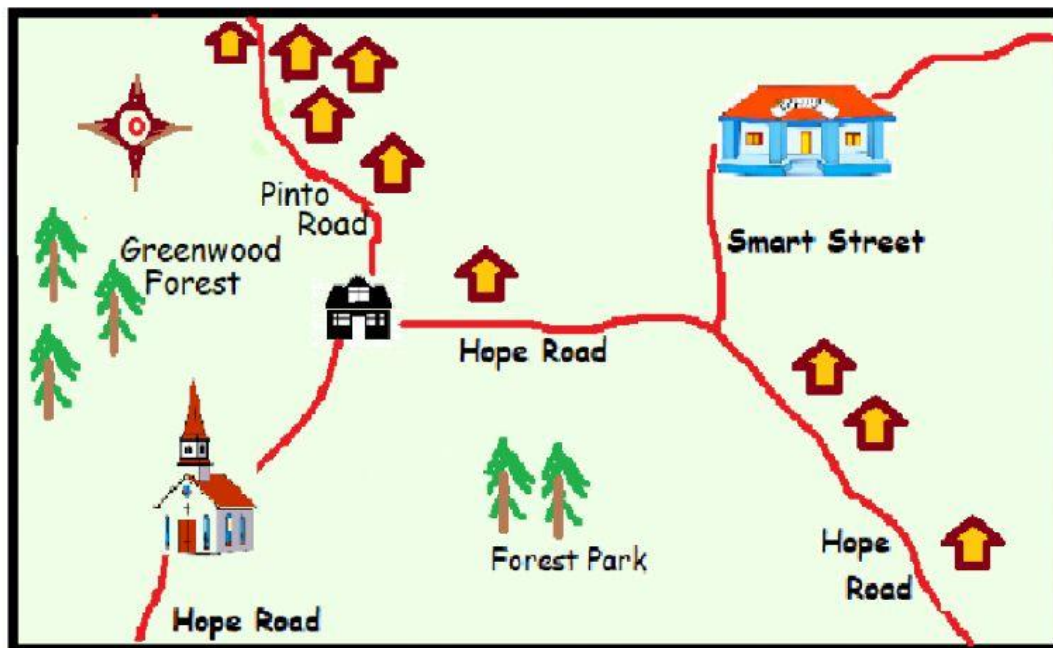


## Using a compass to find directions on a map







1. Drag and drop the letters N, S, E and W (in the boxes) to label the cardinal directions North, South, East and West on the compass in the map shown below.

N                      S                      E                      W

A map showing where Peter lives



**Key**

	Peter's home
	houses
	church
	school
	forest
	road

In the questions below, click on the boxes to select your answers.

2. What place is west of Peter's home? \_\_\_\_\_
3. If Peter wants to go to school he has to go \_\_\_\_\_



4. Forest Park is \_\_\_\_\_ of the church.