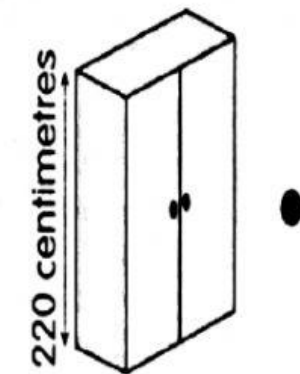


1. Match each of the following items with its length.

☆ (561) 8A1

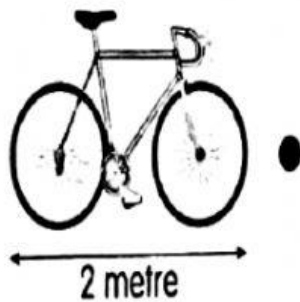


2 m


1 m

220 cm

80 cm



2. Write the length of the following objects, in cm.



a) The length of the needle is \_\_\_\_\_

b) The length of the pencil is \_\_\_\_\_

c) The length of the pencil case is \_\_\_\_\_