

Lesson 4: Units of Measurement




A: Choose the right answer.

Which of the following is equal to **7,651 cm**?

Which of the following is equal to **12,450 m**?

Which of the following is equal to **0.164 km**?

B. Match the following scales to their correct mass.



5.9 kg

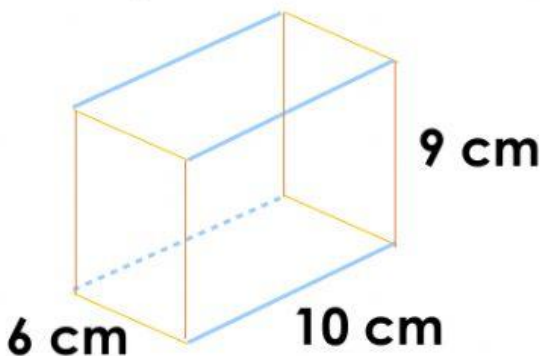
3.4 kg

5.4 kg

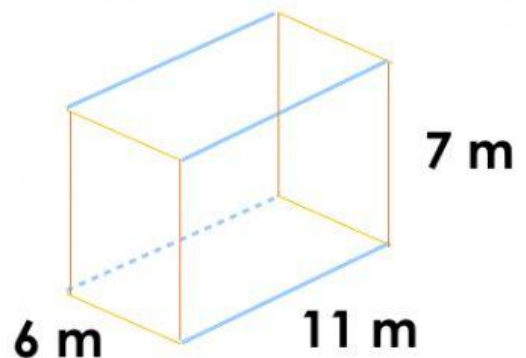
2.6 kg

1.2 kg

C. Compute for the volume of the given cuboids.



cm^3



m^3