




SOLVE



Activity 1

- 1 The pictures below show the mass of a papaya and a pineapple.



Compare the mass of the papaya and pineapple.
Which one is heavier?

The mass of the _____ is heavier.

- 2 The length of  is 6 .

The length of  is 4 .

Which is longer,  or  ?

brush

pencil



The length of the _____ is longer.

3

I am taller than Linda.

I am shorter than Kumar.
I am taller than Linda.



Kumar


Linda

Zain

Who is the tallest?
Who is the shortest?

_____ is the tallest.
_____ is the shortest.


4 Look at the pictures. What can you put into the pencil case?



	Ruler
	Pen
	Glue

I can put a _____ and a _____ into the pencil case.

5




Look at the pictures above. Compare the mass of the jackfruit, pumpkin and watermelon. Determine the lightest and the heaviest fruit.



The lightest fruit is the _____.
The heaviest fruit is the _____.

6

Aminah pours  into a few . Her sister drinks 2 . Her friends drink 4 .

How many glasses a  can fill?

A grape juice box can fill _____ glasses.

 is equal to .