





Farm animals + Numbers

1. Match the digits and the numbers in full. (Correlacione os dígitos e os números por extenso.)

- | | |
|--------------|--------|
| a) Eleven | () 11 |
| b) Thirteen | () 12 |
| c) Nineteen | () 13 |
| d) Seventeen | () 14 |
| e) Twenty | () 15 |
| f) Fifteen | () 16 |
| g) Twelve | () 17 |
| h) Sixteen | () 18 |
| i) Fourteen | () 19 |
| j) Eighteen | () 20 |


2. Write the numbers below in full.

a)   _____

b)   _____

c)   _____

d)   _____

e)   _____

f)   _____

3. Match the numbers in the box with the digits. (Correlacione os números da caixa com os dígitos.)

Twenty - Thirty - Forty - Fifty - Sixty - Seventy - Eighty - Ninety

a) 60 _____

b) 80 _____

c) 40 _____

d) 50 _____

e) 90 _____

f) 30 _____

g) 70 _____

h) 20 _____

4. How many can you see? (Quantas você consegue ver?)



OLD MACDONALD'S FARM KIDS

This is a picture of Mr. MacDonald's farm.
Look at it and answer the questions as fast as you can!

1. How many apples are there in the tree?
☐ 2 ☐ 12 ☐ 20
2. How many spiders are there in the picture?
☐ 3 ☐ 13 ☐ 30
3. How many frogs are there in the pond?
☐ 5 ☐ 15 ☐ 50
4. How many mice can you see?
☐ 4 ☐ 14 ☐ 40