



Money Practice #4

1. Count by 1s.

89			92					97	
----	--	--	----	--	--	--	--	----	--


2. Count by 5s.

5				25			40		
---	--	--	--	----	--	--	----	--	--

3. Count by 10s.

33	43						103		123
----	----	--	--	--	--	--	-----	--	-----

4. Who am I? Choose the value of each coin.

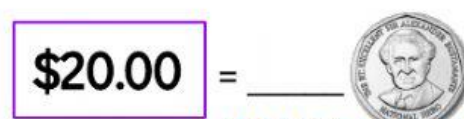



5. How many dollars?



\$.	→	\$.	→	\$.	→	\$.
------	---	------	---	------	---	------

6. How many coins?



\$20.00 =



\$35.00 =



\$35.00 =



\$100.00 =



\$100.00 =



\$100.00 =



7. How many dollars?



\$.00



\$.00



\$.00



\$.00



\$.00