

AM/PM

MIDNIGHT

NOON

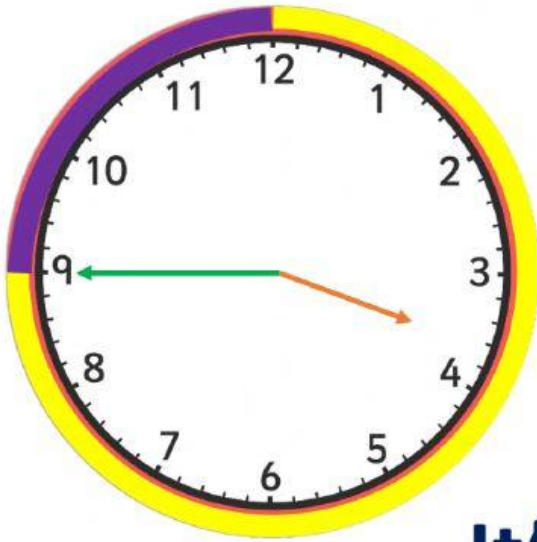
MIDNIGHT



12 o'clock



Reading time
analogue clock and digital clock.



(It's three forty-five.)

03:45


It's **forty-five** **past** **3.**

It's a quarter **to** 4.

READ THE TIME ON A DIGITAL CLOCK

What time is it?

(Hour) (Minute)



(It's ten forty-five.)

It's forty-five **past** 10.

It's fifteen **to** 11.

It's a quarter **to** 11.

TELL THE TIME ON A DIGITAL CLOCK

What time is it?

03:15

06:22

02:14

07:30

09:45

DRAW THE TIME

It's eight forty-one.

:

It's twelve fifty-six.

:

It's a quarter past 4.

:

It's half past two.

:

1 Write these analogue times as digital times.

a 25 past 3

:

b 10 past 4

:

c 35 past 6

:

d 45 past 8

:

e 55 past 10

:

f 15 past 7

:

2 Order these times, from earliest to latest.

4:30

4:45

4:05

4:50

4:20

4:55

Challenge
2

1 Write the equivalent analogue times beside these digital times.

Example: 12:26 26 minutes past 12 o'clock

a 10:46

b 4:53

c 6:11

d 8:55

2 Write the times on these clocks in two different ways.

a



b




c



3 Show or write the missing times in each question.


a



10:22

a.m. ☐
p.m. ☒

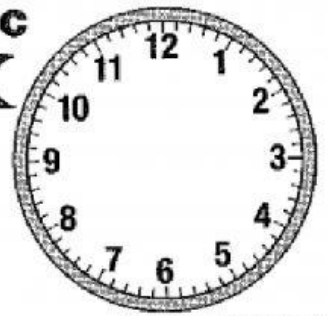
b



:

a.m. ☐
p.m. ☐

c



12 minutes to 8
in the evening

a.m. ☐
p.m. ☐