

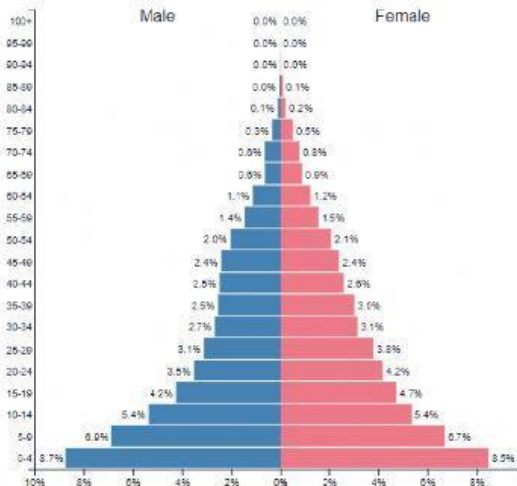
# 11CL Social Studies

Name: \_\_\_\_\_

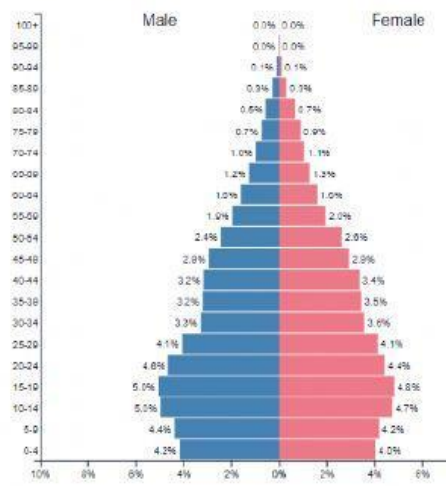
## Population Pyramid worksheet

Class: \_\_\_\_\_

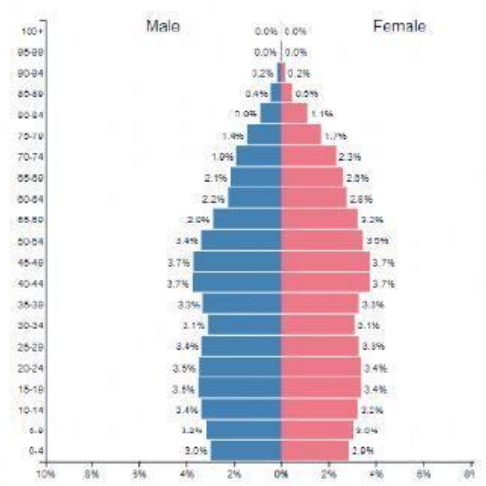
Country A



Country B



Country C



### Questions

1. Which country has the largest ageing population?
2. Which country experienced the lowest birth rate?
3. Which country has the highest dependency ratio?
4. Which country has a rapid decline in the fertility levels? Justify your response.
5. Which country will require the government to provide more educational facilities while at the same time creating job opportunities?
6. Write brief summary of the three countries highlighted on the pyramids.