


POSITION OF THE OBJECTS:

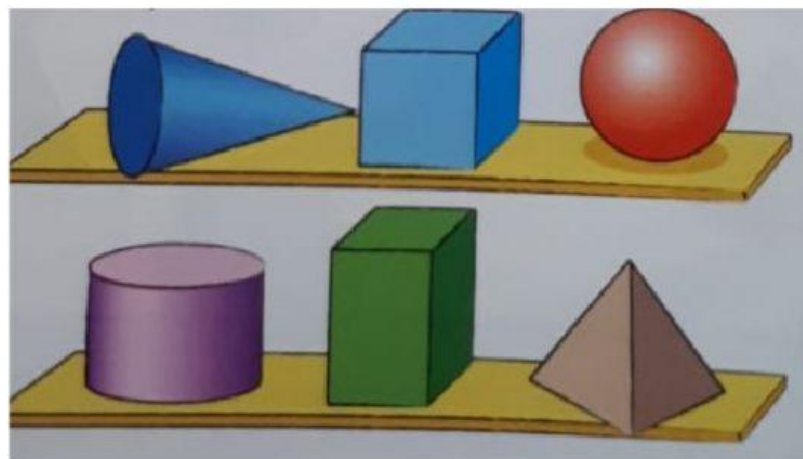


The orange box is below the black box.

The green box is above the white box.

The yellow box is between the black and the green box.

The red box is beside the white box.



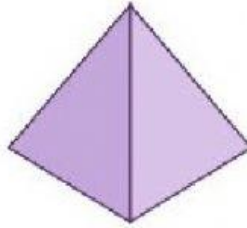
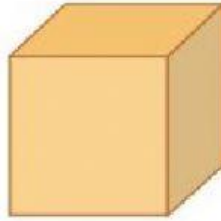
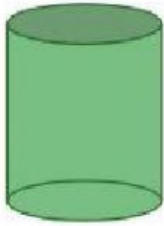
Which shape is above the pyramid? _____

Which shape is below the cone? _____

Which shape is beside the cylinder? _____

Which shape is between the cone and the sphere? _____

Answer the questions:



How many shapes are there in the picture above? _____

Which shape is above the purple pyramid? _____

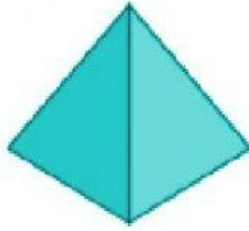
Which shape is below the green cylinder? _____

Which shape is beside the red sphere? _____

Which shape is colored blue? _____

What is between the sphere and the cone? _____

Complete the names of each shape and match them with the right picture:



☐ S _ _ _ _ E

☐ _ _ _ B E

☐ _ _ _ N E

☐ C _ _ _ _ D E R

☐ _ _ _ _ M I D

☐ R E C T A N G _ _ _ _ _

