

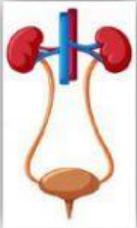



Choose the correct answer for the following questions.

Direction: Identify the following pictures.

1.  a. brain      b. lungs      c. heart
2.  a. lungs      b. liver      c. kidney
3.  a. kidneys      b. lungs      c. brain
4.  a. brain      b. lungs      c. heart

Direction: Identify the organs described for each number.

5. It pumps blood.      a. blood      b. heart      c. lungs
6. It is the control center of the body.      a. heart      b. liver      c. brain
7. It takes in oxygen from the air we inhale through the nose.      a. lungs      b. kidney      c. stomach

8. It removes waste from the blood.

a. stomach

b. kidney

c. liver

9. It carries nutrients and oxygen to all cells in the body.

a. kidney

b. blood

c. lungs

10. It is the gas we breathe in.

a. carbon dioxide

b. nitrogen

c. oxygen