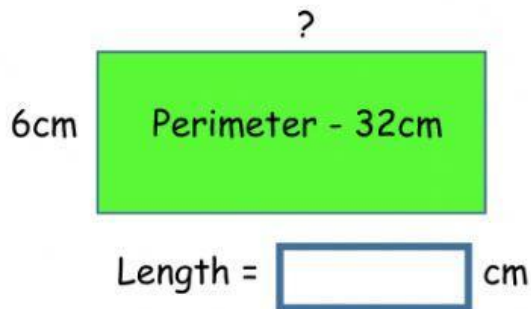
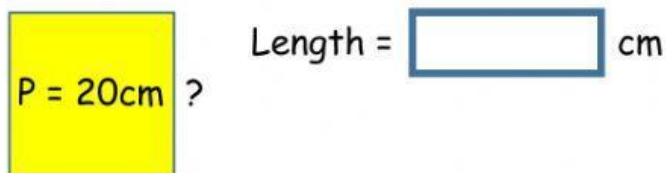


Exercise for Group A:

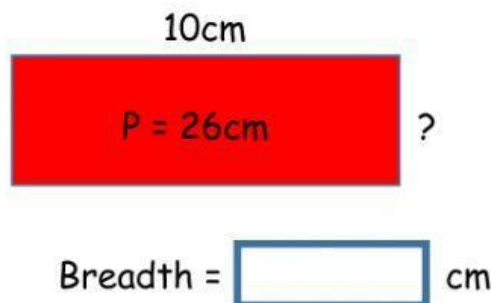
1) The perimeter of a rectangle is 32cm. Its breadth is 6cm. Find its length:



2) The perimeter of a square is 20cm. Find the length of one side of the square:



3) The perimeter of a rectangle is 26cm. Its length is 10cm. Find its breadth:



4) The area of a square garden is 100m<sup>2</sup>. Find:

A) The length of each side of the garden =  m

B) The perimeter of the garden =  m

