





# Tall and Short


Tick the tall person in each set.



Which one is taller? Tick the correct answer.



Which one is shorter? Tick the correct answer.



Tick the box of the correct answer.



Mother is

taller

than father.

shorter



The coconut tree is

taller

shorter

than the mango tree.



Building B is


taller

shorter

than building A.



Building A



Building B