


Name:






Year: 1

## Pictogram Counting

A) Count the fruits below and write the numbers in the table below.



Count the fruits and complete the table below

				
strawberry	cherries	bananas	pear	watermelon

B) Click on the numbers from the bottom in the boxes according to the passage.

Teacher Zirah asked students from Year 1 of their favourite fruits.

2 students love watermelons.

3 students love apples.

5 students love bananas.

| student loves grapes.

| student loves oranges.