




SOMKIDVITTAYA SCHOOL
SCIENCE --Chapter 4 -- Test
Grade 3 /2 MEP - Term 1 (2021-2022)

Name: _____ Score: _____

A. Look at the picture and write **push** or **pull** on the blank.













B. 1. Choose the contact forces. (3 points)



2. Choose the non-contact forces. (3 points)



C. Match the meaning of column A to column B.

A

B

1. Pull the objects down to earth.

A. Pull

2. Involves push and pull.

B. Forces

3. Move towards yourself.

C. Gravity

4. Move away from you.

D. Magnet

5. Attract metal objects.

E. Push

D. Write the forces according to its type.

applied force

gravitational force

frictional force

magnetic force

CONTACT FORCES	NON-CONTACT FORCES
1.	1.
2.	2.

E. Name the various magnet.

circular magnet

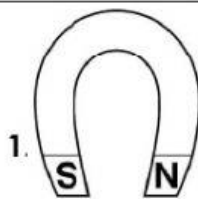
U-shaped magnet

ring magnet

horseshoe magnet

cylindrical magnet

bar magnet




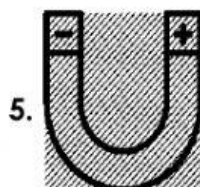
1. _____

2. _____



3. _____

4. _____



5. _____

6. _____

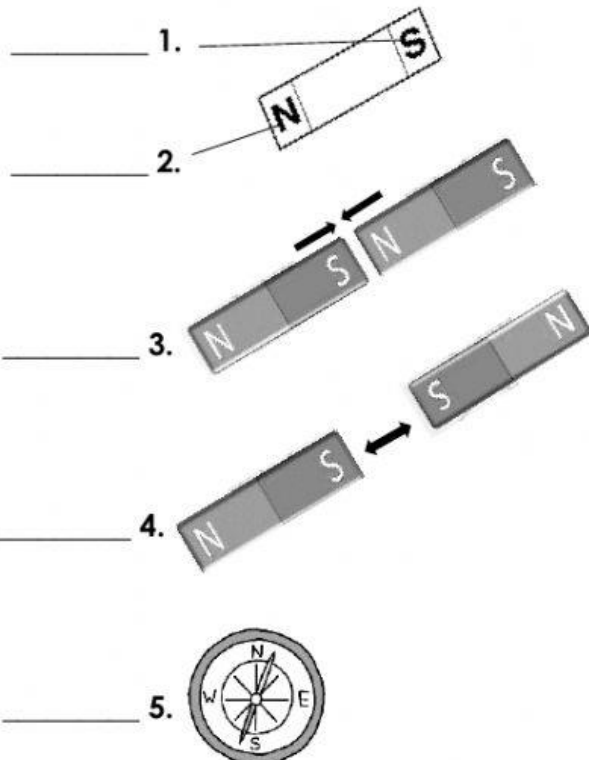
F. Write the magnetic materials and non-magnetic materials.

→ pencil key eraser paper clip
→ nails tissue scissors pen

Magnetic objects	Non-magnetic objects
1.	1.
2.	2.
3.	3.
4.	4.

G. Match.

A



B

A. Attract

B. North Pole

C. Compass

D. South Pole

E. Repel