

## Mathematics Year 1

## Length

Name :

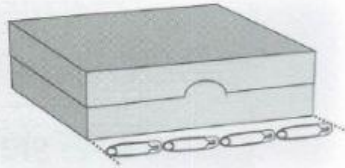


# MEASURE AND COMPARE THE LENGTH OF OBJECTS

## Activity 1

Fill in the blank.

a



The length of the box is equal to

4



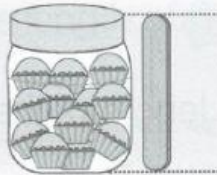
b



The width of the book is



c



The height of the jar is equal to



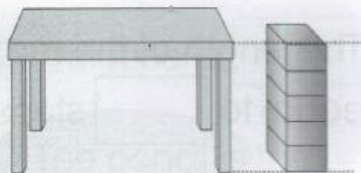
d



The length of the straw is



e



The height of the table is equal  
to  boxes.