




LESSON #1

What is $475 + 869$?	Round 47 to the nearest ten.	Tell what fraction of the shape is shaded. 	$13 + 17 + 21 =$
			
$30 - 16 = ?$	656 ○ 566	Would the length of a pencil be about 6 inches or 6 feet?	Which digit is in the <u>thousands</u> place in the numeral 7, 841?
What is the product of 4×8	What is the next number in the sequence? 25, 30, 35, ...	Name this shape 	What is $95 - 67$?

$36 \div 9 =$	Put these numbers in ascending order. 421, 412, 423, 410	What time will it be 15 minutes after 10:30	Write 435 in expanded form
Jake has 2 quarters, 1 dime, and 1 nickel . How much money does Jake have?	Don's book has 289 pages. Jeff's book has 345 pages. How many more pages does Jeff's book have than Don's?	Write 12, 345 in short word form	Write the number 400 + 50 + 1 in standard form.