




Name: \_\_\_\_\_ Year: 1 \_\_\_\_\_



## Revision on Telling Time



Match the time correctly.






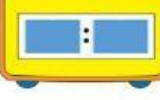
- a)  • eleven o'clock
- b)  • eight thirty
- c)  • half past one

Time: o'clock  
& thirty

Pick the correct answer at each question.

- a) It is 9 o'clock 9 thirty 
- b) It is 12:30 1:30 
- c) It is half past 4 5 thirty 

Write the digital clock.

- a)  → 
- b)  → 
- c)  → 

Solve the word problem.

At **10 o'clock**, Habriyah goes out to buy bananas.  
She finished **1 hour later**.



What time is it now?

