

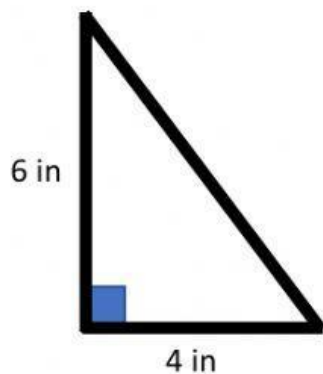
Name \_\_\_\_\_

Date \_\_\_\_\_

Year Group \_\_\_\_\_

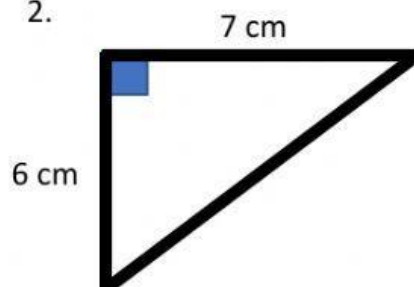
Find the missing side of each right triangle and simplify

1.



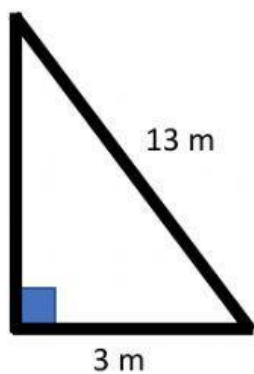
Answer = \_\_\_\_  $\sqrt{\quad}$  in

2.



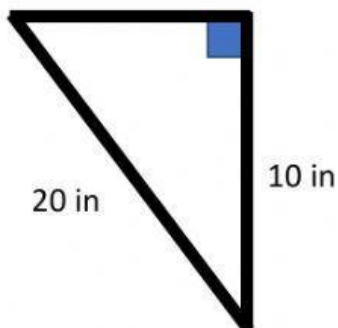
Answer = \_\_\_\_  $\sqrt{\quad}$  cm

3.



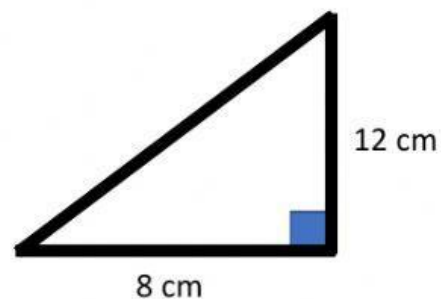
Answer = \_\_\_\_  $\sqrt{\quad}$  m

4.



Answer = \_\_\_\_  $\sqrt{\quad}$  in

5.



Answer = \_\_\_\_  $\sqrt{\quad}$