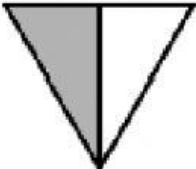
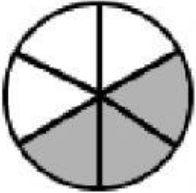

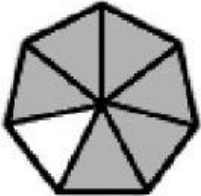


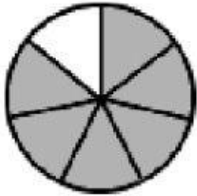

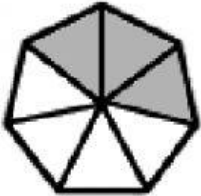

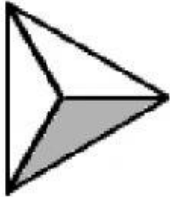

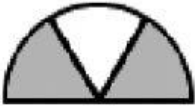





# Fracciones propias.

1. Observa cada dibujo y escribe la fracción que corresponde.

DIBUJO	FRACCIÓN
	<div style="border: 1px solid black; height: 80px; width: 100%; background-color: #add8e6; position: relative;"><div style="position: absolute; top: 50%; left: 50%; transform: translate(-50%, -50%); width: 80%; height: 10px; border-bottom: 1px solid black;"></div></div>
	<div style="border: 1px solid black; height: 80px; width: 100%; background-color: #add8e6; position: relative;"><div style="position: absolute; top: 50%; left: 50%; transform: translate(-50%, -50%); width: 80%; height: 10px; border-bottom: 1px solid black;"></div></div>
	<div style="border: 1px solid black; height: 80px; width: 100%; background-color: #add8e6; position: relative;"><div style="position: absolute; top: 50%; left: 50%; transform: translate(-50%, -50%); width: 80%; height: 10px; border-bottom: 1px solid black;"></div></div>
	<div style="border: 1px solid black; height: 80px; width: 100%; background-color: #add8e6; position: relative;"><div style="position: absolute; top: 50%; left: 50%; transform: translate(-50%, -50%); width: 80%; height: 10px; border-bottom: 1px solid black;"></div></div>
	<div style="border: 1px solid black; height: 80px; width: 100%; background-color: #add8e6; position: relative;"><div style="position: absolute; top: 50%; left: 50%; transform: translate(-50%, -50%); width: 80%; height: 10px; border-bottom: 1px solid black;"></div></div>
	<div style="border: 1px solid black; height: 80px; width: 100%; background-color: #add8e6; position: relative;"><div style="position: absolute; top: 50%; left: 50%; transform: translate(-50%, -50%); width: 80%; height: 10px; border-bottom: 1px solid black;"></div></div>

2. Completa este texto con las siguientes palabras:

**Fracciones** **Parte** **Denominador** **Todo** **Numerador**

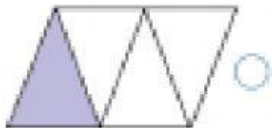
## Fracciones propias

Son aquellas \_\_\_\_\_ que su  
\_\_\_\_\_ es menor que su  
\_\_\_\_\_.

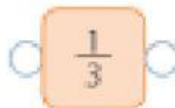
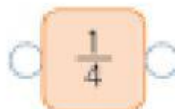
Dado que el numerador es la  
\_\_\_\_\_ de un \_\_\_\_\_  
que es el denominador.

3. Une las columnas según corresponda.

Representación gráfica



Representación numérica



Con palabras

