























DATA HANDLING

NUMBER OF BOYS IN SIX CLASSES

CLASS	NUMBERS OF PUPILS
4 GEMILANG	  
4 CEMERLANG	 
5 GEMILANG	  
5 CEMERLANG	    
6 GEMILANG	   
6 CEMERLANG	 
 REPRESENT 4 BOYS	

COMPLETE THE EMPTY BOXES BASED ON THE PICTOGRAPH

- The title of pictograph above is
- The number of boys in 6 Gemilang is
- There are 20 boys in
- There are boys in 5 Gemilang and 8 boys in
- The difference number of boys between and is 4.