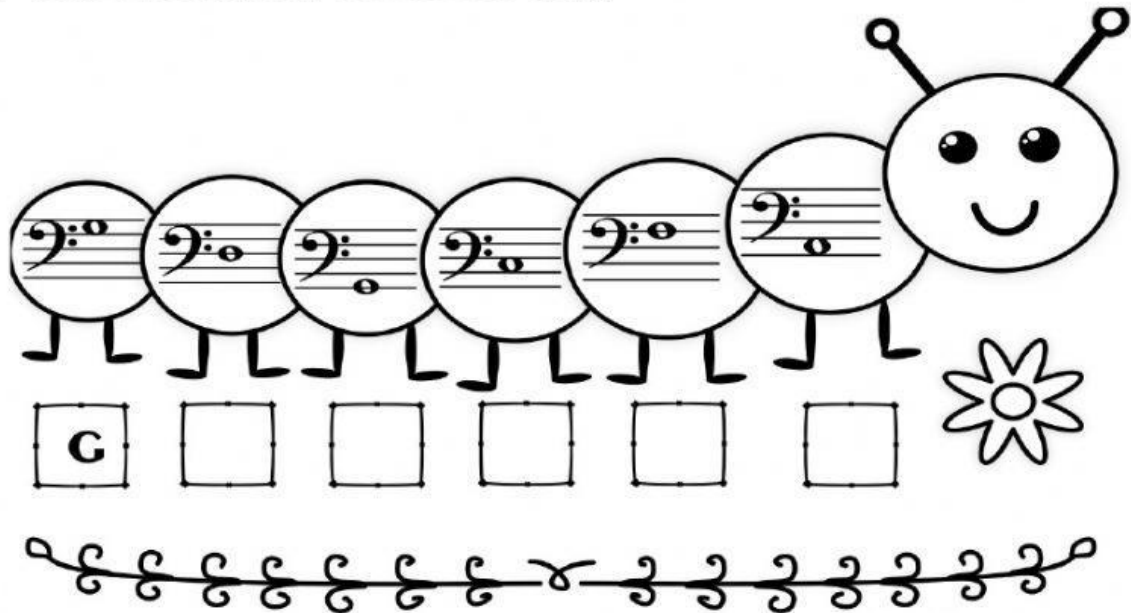






Treble Clef and Bass Clef Note Names

Pop Quiz

1. Name these notes on the Bass Clef Staff.



2. Decode the secret words by writing the letter name for each note.





3. How many **F** notes are there in this tune? _____



A 1

B 4

C 3

D 2

4. How many **A** notes are there in this tune? _____




A 2

B 1

C 3

D 4

5. Which of these notes is **F** in the Bass Clef? _____



6. How many **B** notes are there in this tune?



A 3

B 1

C 2

D 4