

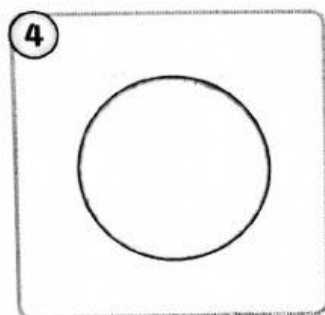





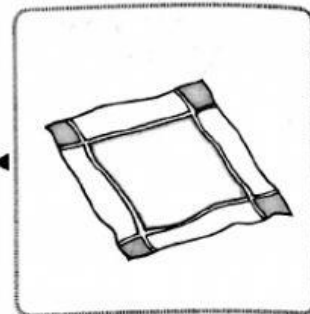
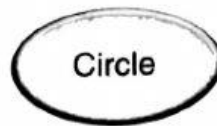
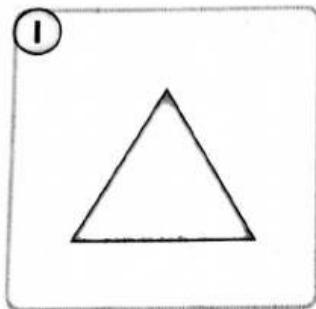


B Match.

4

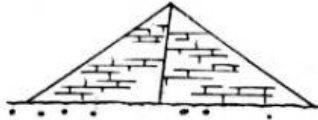


SUMMATIVE PRACTICE

Objective Questions

Circle the correct answer.

- 1 The diagram below shows a building.



State the shape of the building in the diagram above.

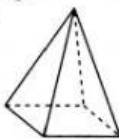
- A Pyramid
- B Cone
- C Cube

- 2 Which of the following shapes does not have any corners?

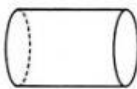
A



C



B



- 3 Which of the following shapes has curved side?

- A Triangle
- B Square
- C Circle

- 4 How many sides does a cube have?

- A 12
- B 8
- C 2

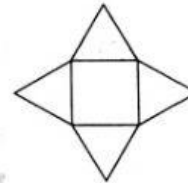
5



Name the shape of the object shown above.

- A Triangle
- B Square
- C Rectangle

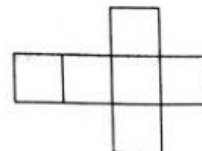
6



What is the shape that has the net above?

- A Cone
- B Pyramid
- C Cylinder

7



The diagram above is the net for a

- A cube
- B cuboid
- C sphere

- 8 Which of the following objects has corners?

- A Book
- B Drinking can
- C Bottle

