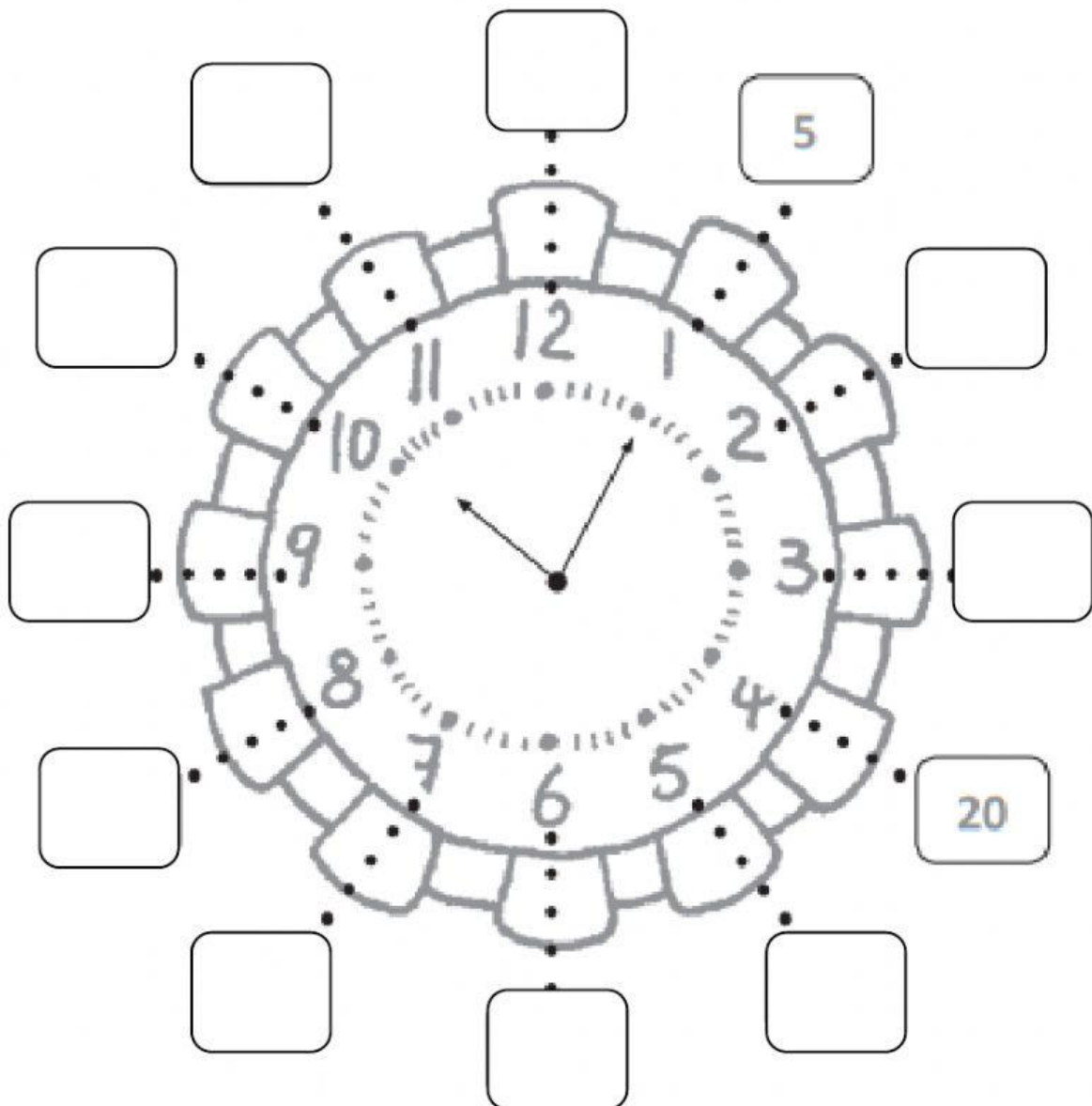




## Time

### Practice 1 The Minute Hand

1. Fill in the boxes with the number of minutes.



2. Fill in the blanks.

**Example**



The minute hand is pointing at  
30 minutes.

(a)



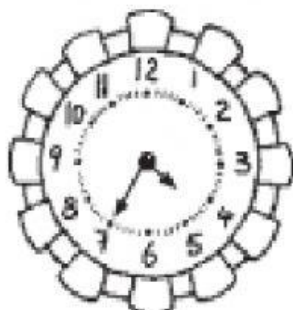
The minute hand is pointing at  
 minutes.

(b)



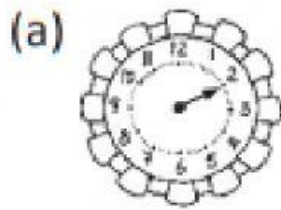
The minute hand is pointing at  
 minutes.

(c)

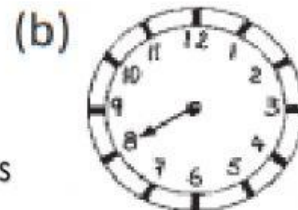


The minute hand is pointing at  
 minutes.

3. How many minutes does the minute hand show?



\_\_\_\_\_ minutes



\_\_\_\_\_ minutes



\_\_\_\_\_ minutes



\_\_\_\_\_ minutes

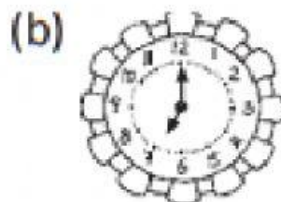
4. What is the time?




\_\_\_\_\_ O'clock



\_\_\_\_\_ minutes after 3 o'clock.



\_\_\_\_\_ O'clock



\_\_\_\_\_ minutes after 7 o'clock.

What is the time now?



\_\_\_\_\_ O'clock



\_\_\_\_\_ minutes after 10 o'clock.