



## SARASAS AFFILIATED SCHOOLS

Final Examination      Asean Bilingual Programme      Semester 1/2021  
Subject: Mathematics      Class 2      Time: 60 minutes      10 points  
First Name: \_\_\_\_\_ Last Name: \_\_\_\_\_ Class: \_\_\_\_\_ No. \_\_\_\_\_

---

### Part A: Multiple Choice. Choose the best answer. (5 points)

1. Which of the following is the unit of length?

- a. kilogram                      b. centimeter                      c. gram

2. How many digits of thousand?

- a. six digits                      b. seven digits                      c. four digits

3. Which of the following is the unit of weight?

- a. grams                      b. centimeter                      c. meter

4. What is the symbol of equal?

- a. +                      b. =                      c. -

5. What do we use in subtraction?

- a. minus                      b. plus                      c. equal

6. Which of the is instrument for measuring length?

- a. scale                      b. ruler                      c. balance

7. What is this?



a. measuring tape

b. ruler

c. weighing scale

8. How many kheed in 1kg?

a. 10 kheids

b. 5 kheids

c. 8 kheids

9. What is kg mean?

a. meter

b. kilogram

c. gram

10. Which is comparing length?

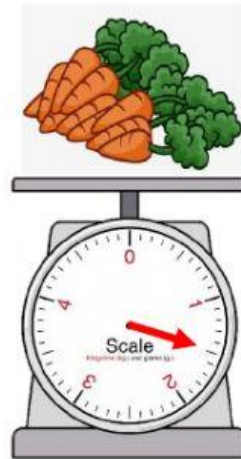


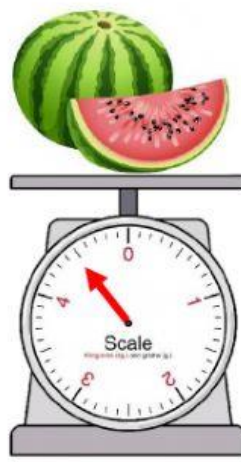
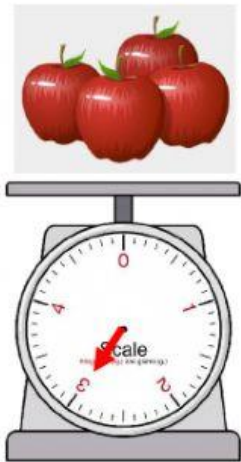
a. heavy

b. light

c. tall

**Part B: Matching. Drag the correct pictures from the box to the words.**

**(5 points)**



11. Which is heavier, the apples or the grapes?

12. Which is the lightest food?

13. Which is the heaviest fruit?

14. Which is heavier, the carrots or the grapes?

15. Which is the heaviest vegetable?