


AREA OF RECTANGLES AND SQUARES

Find the area of each figure.

1)




Area of the rectangle

$$= \underline{\hspace{2cm}} \times \underline{\hspace{2cm}}$$

$$= \underline{\hspace{2cm}} \text{ cm}^2$$

2)

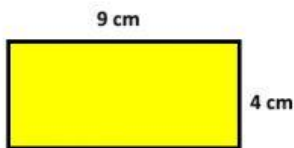


Area of the square

$$= \underline{\hspace{2cm}} \times \underline{\hspace{2cm}}$$

$$= \underline{\hspace{2cm}} \text{ cm}^2$$

3)




Area of the rectangle

$$= \underline{\hspace{2cm}} \times \underline{\hspace{2cm}}$$

$$= \underline{\hspace{2cm}} \text{ cm}^2$$

4)

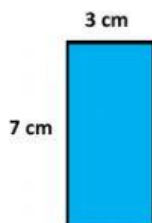


Area of the square

$$= \underline{\hspace{2cm}} \times \underline{\hspace{2cm}}$$

$$= \underline{\hspace{2cm}} \text{ cm}^2$$

5)



Area of the rectangle

$$= \underline{\hspace{2cm}} \times \underline{\hspace{2cm}}$$

$$= \underline{\hspace{2cm}} \text{ cm}^2$$