



Họ và tên: .....

# Phiếu ôn tập Toán – Tiếng Việt

## Bài 1: Số ?

	<input type="text"/>
	<input type="text"/>
	<input type="text"/>
	<input type="text"/>
	<input type="text"/>

## Bài 2: Nối tranh vẽ với số thích hợp



6

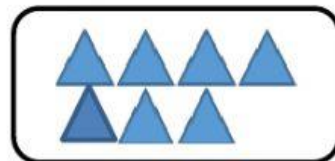


2

10

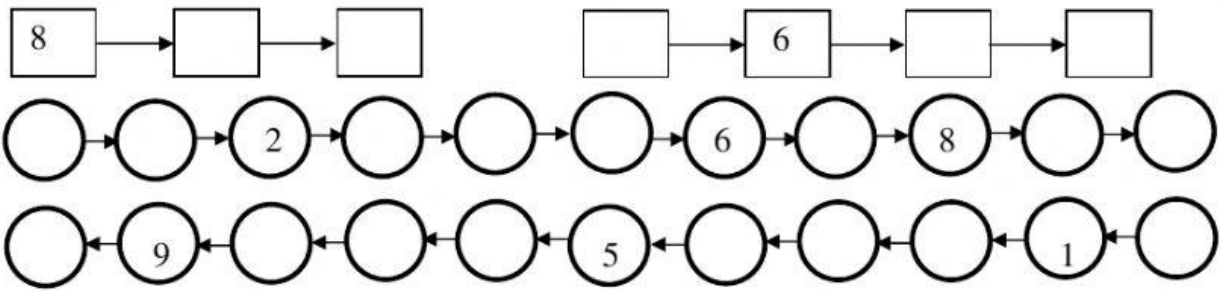
7

3

8



**Bài 3: Số?**



**Bài 4: Số?**







Trong tranh có  con vật có 4 chân.

Trong tranh có  con vật có 2 chân.

Trong tranh có:



Bài 5: Nối?



Bài 6: Điền e hoặc ê vào chỗ chấm?

ê

e



tr .....



l.....