



Basic of Building

match the shape

a Banknote



b Set square



c Orange




d Postage stamp



e Magnifying glass



f Whiteboard



rectangle

square

triangle

circle

a How many basic shapes can you identify?



1

2

3

b State the basic shapes.

3. State the basic shape block for each object below.



A



B



C



D



E

A)


B)

C)


D)

D)

4. Zaki wants to keep his old books in a box. Between the shapes of boxes P and Q, which is more suitable? Why?



box P



box Q