



UNIT EXAMINATION
MUSIC and ARTS




NAME

GRADE LEVEL:

MUSIC

Complete the table of the kinds of rests. Choose the LETTER of the correct answer (2 pts)

D. 	E. 	
A. WHOLE REST	B. EIGHT REST	C. SIXTEENTH REST

REST	DURATION	SYMBOL
1.	Specified duration	
Half rest	Half of the count of the whole rest	2.
Quarter rest	Half of the count of all rest	3.
4.	Half of the count of quarter rest	
5.	Half of the count of eighth rest	

ARTS

Identify the element of art described in each number. Choose your answer in box below.

_____ 1. It is the name of the color, such as red, maroon, periwinkle, etc.

_____ 2. It is the brightness or the dullness of the color.

_____ 3. The lightness and darkness of the color.

The lightness of a color is called _____ 4., while the darkness of a color is called _____ 5.

_____ 6. It is the mark left by a moving point.

_____ 7. It is a two-dimensional object that is flat having only length and width.

The outline of a drawing called _____ 8.

_____ 9. It has a positive and negative aspects.

_____ 10. It is said to be the most eye-catching element of art.

Lines	Hue
Shape/form	Intensity
Shape	Values
Color	Tint
Contour	Shade