




Name \_\_\_\_\_

M-5-9-D

Use the PICTOGRAPH to answer the questions.

(In this exercise, you will have to count by 2s because each paw print counts as 2 votes)

Favorite Pets	
Cat	    
Dog	 
Hamster	  

Each  stands for 2 votes.

How many voted for Cat? \_\_\_\_\_

How many voted for Dog? \_\_\_\_\_

How many voted for Hamster? \_\_\_\_\_

How many more voted for Hamster than Dog? \_\_\_\_\_

Remember: "Email my answers to my teacher", [dceriel@schools.nyc.gov](mailto:dceriel@schools.nyc.gov)