












		WORKING OUT
1)	<p>There are 6 .</p> <p>2 more  come along.</p> <p>How many  in total? _____</p>	
2)	<p>I have 5 .</p> <p>I lose 3 .</p> <p>How many  do I have left? _____</p>	
3)	<p>Sally has 6 .</p> <p>Newton has 4 .</p> <p>What is the sum? _____</p>	
4)	<p>I have 5 .</p> <p>I spend 5 .</p> <p>How many are left? _____</p>	
5)	<p>There are 10 .</p> <p>2  are washed away.</p> <p>What is 10 minus 2? _____</p>	