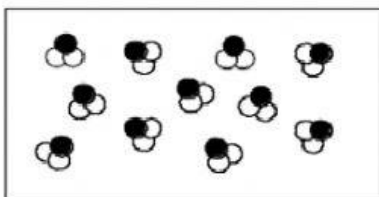


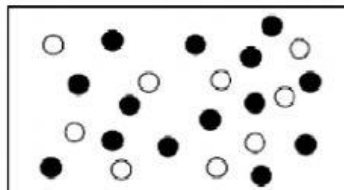
**Classify the following particle diagrams accordingly:**

1)



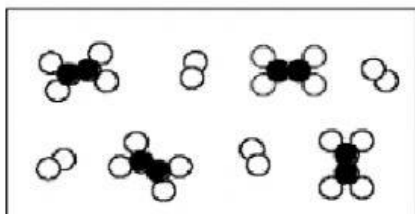
- A) A pure substance - (an element)
- B) A pure substance - (a compound)
- C) mixture of elements
- D) mixture of compounds
- E) mixture of an element and a compound

2)




- A) A pure substance - (an element)
- B) A pure substance - (a compound)
- C) mixture of elements
- D) mixture of compounds
- E) mixture of an element and a compound

3)



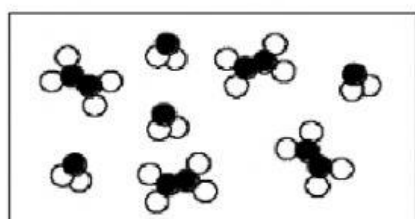
- A) A pure substance - (an element)
- B) A pure substance - (a compound)
- C) mixture of elements
- D) mixture of compounds
- E) mixture of an element and a compound

4)



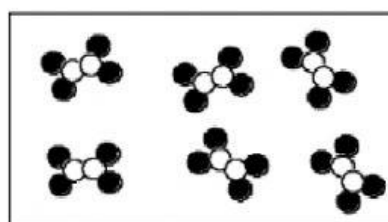
- A) A pure substance - (an element)
- B) A pure substance - (a compound)
- C) mixture of elements
- D) mixture of compounds
- E) mixture of an element and a compound

5)



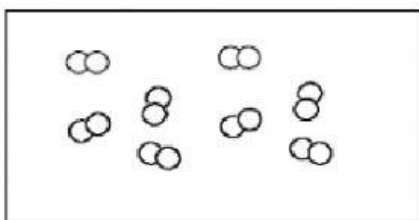
- A) A pure substance - (an element)
- B) A pure substance - (a compound)
- C) mixture of elements
- D) mixture of compounds
- E) mixture of an element and a compound

6)



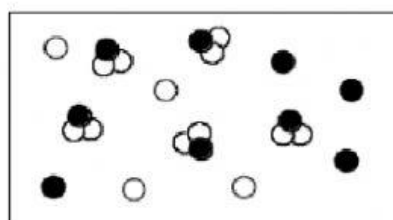
- A) A pure substance - (an element)
- B) A pure substance - (a compound)
- C) mixture of elements
- D) mixture of compounds
- E) mixture of an element and a compound

7)



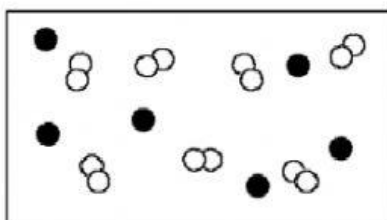
- A) A pure substance - (an element)
- B) A pure substance - (a compound)
- C) mixture of elements
- D) mixture of compounds
- E) mixture of an element and a compound

8)



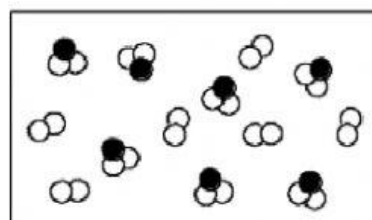
- A) A pure substance - (an element)
- B) A pure substance - (a compound)
- C) mixture of elements
- D) mixture of compounds
- E) mixture of an element and a compound

9)



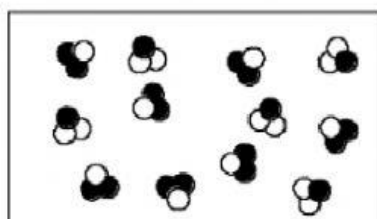
- A) A pure substance - (an element)
- B) A pure substance - (a compound)
- C) mixture of elements
- D) mixture of compounds
- E) mixture of an element and a compound

10)



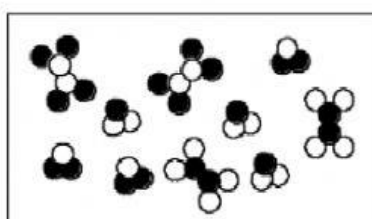
- A) A pure substance - (an element)
- B) A pure substance - (a compound)
- C) mixture of elements
- D) mixture of compounds
- E) mixture of an element and a compound

11)



- A) A pure substance - (an element)
- B) A pure substance - (a compound)
- C) mixture of elements
- D) mixture of compounds
- E) mixture of an element and a compound

12)



- A) A pure substance - (an element)
- B) A pure substance - (a compound)
- C) mixture of elements
- D) mixture of compounds
- E) mixture of an element and a compound

