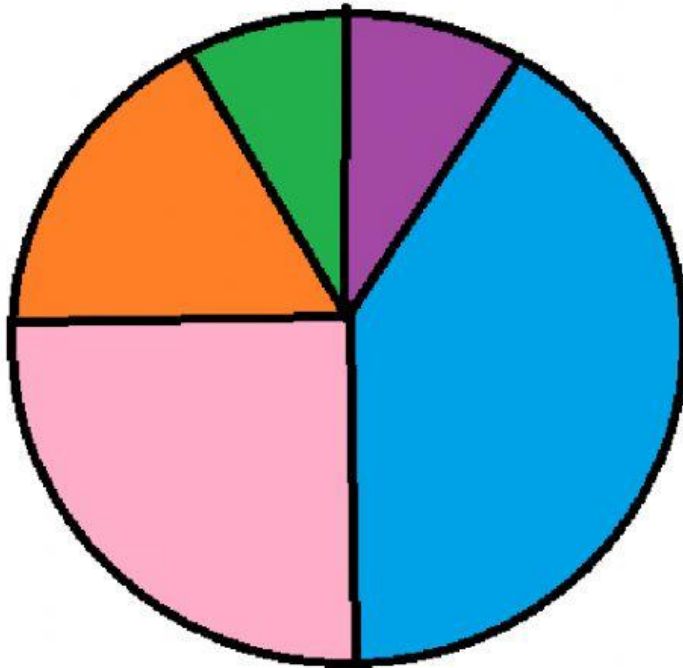





Handling Data

Circle Graphs

The given Circle graph shows what children do in the weekend. The total number of children is 60.



-  - Watch TV
-  - Cycling
-  - Study
-  - Playing Outside
-  - Playing In home

- 1- What is the fraction of the children that are playing in home- _____?
- 2- How many children watched T.V? _____
- 3- What is the fraction of the children that are studying? _____
- 4- What is the total fraction of the children that Watch T.V, Cycling, Study, Playing Inside, Playing Outside?

- 5- How many children are Cycling.
