


## Formative Practice: Fractions of a whole

Name: \_\_\_\_\_ grade: III

I- Find the missing **numerators**:



c



a



u



III-Write the fractions **in words**:

a.  $\frac{4}{8} =$  \_\_\_\_\_

b.  $\frac{1}{2} =$  \_\_\_\_\_

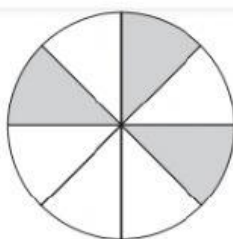
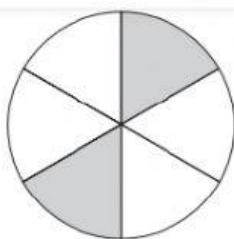
c.  $\frac{2}{3} =$  \_\_\_\_\_

d.  $\frac{5}{6} =$  \_\_\_\_\_

e.  $\frac{3}{4} =$  \_\_\_\_\_

II-Find the missing **denominators**

4.



6.

