

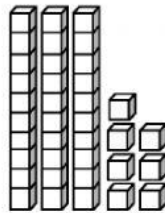
Student's Name: _____ Group: **1A**

Teacher's Name: **Lic. Paola Mendoza Aguilar** Month: **SEPTEMBER**

Exam total: **18** Correct Answers: _____ Final Grade: _____

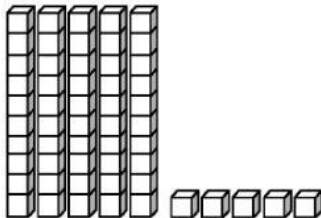
Math Exam

1. Fill in the tens and ones. Then write the total amount.



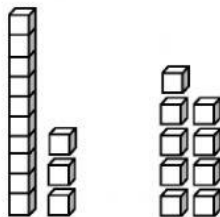
TENS	ONES

There are _____ cubes.



TENS	ONES

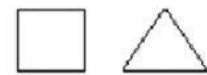
There are _____ cubes.



TENS	ONES

There are _____ cubes.

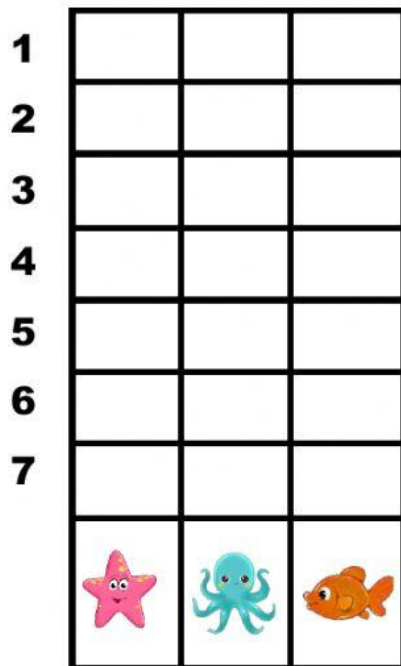

2. Select the correct shape, to complete the pattern.




3. Draw a line to match the number picture and the word.

eleven	13	11	15	fourteen
twelve				fifteen
thirteen	14	12	10	ten

4. Count each animal and record the results on the graph. Answer the questions below.



2. How many  are there?

1. How many  are there?
